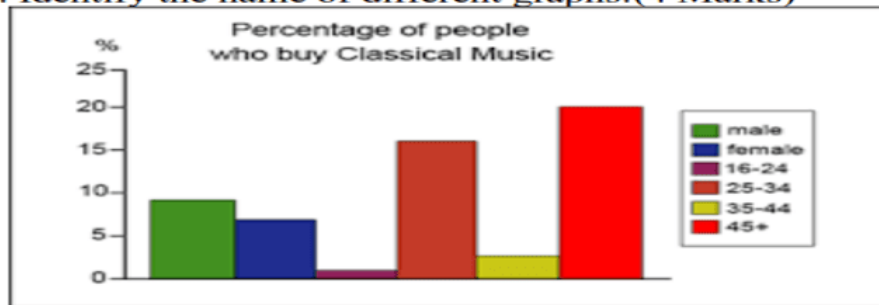
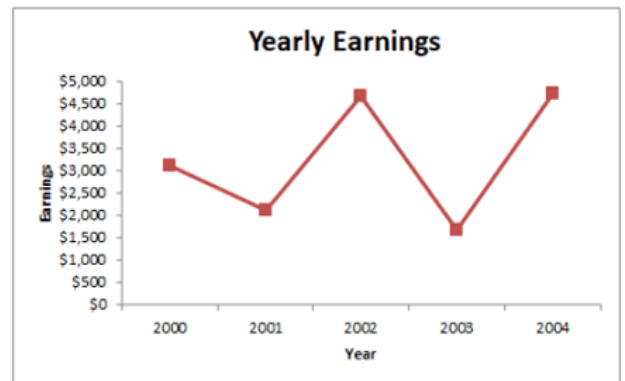
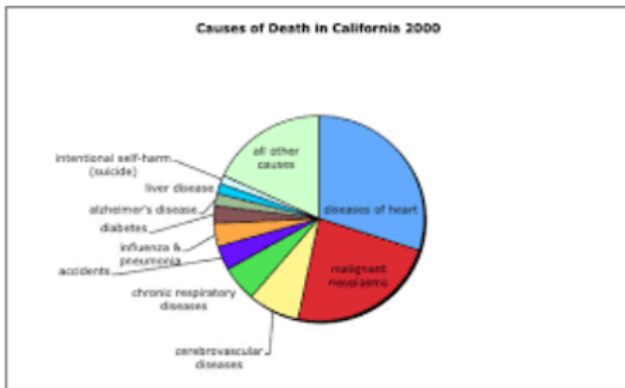
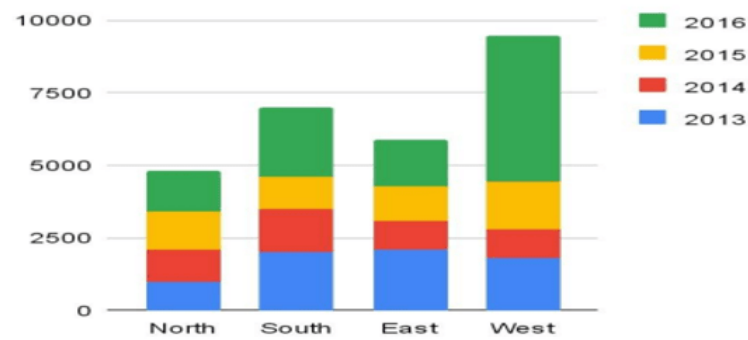


Bridge Course Activity

Q3. Identify the name of different graphs:(4 Marks)



ABC SALES RECORD



Ans 1) _____

2) _____

3) _____

4) _____

Q4. Write any 4 important parts of a computer.

(1 Mark)

1) _____ 2) _____ 3) _____ 4) _____

Q1. Use a prefix or a Suffix to make a new word out of the word in brackets compare the sentence with it. (5marks)

1) I say it's _____ (possible)

Ans: I say it's **impossible**.

2) I like this town the people are very _____ (help)

Ans: I like this town the people are very **helpful**.

3) Today's football match was very _____ (enjoy)

Ans: Today's football match was very **enjoyable**.

4) Don't play with sharp knife it is _____ (danger)

Ans: Don't play with sharp knife it is **dangerous**.

5) It was Very _____ activity (joy)

Ans: It was Very **joyful** activity.

Q2. Answer the following Questions.

(5 Marks)

1) Which things are required in a first Aid Box?

Ans:

*an up-to-date first-aid manual

*a list of emergency phone numbers

*sterile gauze pads of different sizes

*adhesive tape adhesive bandages

(Band-Aids) in several sizes

*elastic bandage

*a splint

*antiseptic wipes

*Soap

*antibiotic ointment

*antiseptic solution

(like hydrogen peroxide)

*hydrocortisone cream (1%)

*sharp scissors

*safety pins

*disposable instant cold packs

*calamine lotion

*Thermometer

*tooth preservation kit

*plastic non-latex gloves

(at least 2 pairs)

2) How would you treat the following?

i) A person who feels faint.

Ans: I would treat as:

- 1) Have the person lie down with the head below the level of the heart.
- 2) Turn the victim's head to the side so the tongue doesn't fall back into the throat.
- 3) Loosen any tight clothing.
- 4) Apply moist towels to the person's face and neck.
- 5) Keep the victim warm, especially if the surroundings are chilly.
- 6) Will Call ambulance for further treatment.

ii) A person met with an accident.

If someone is injured in an incident,

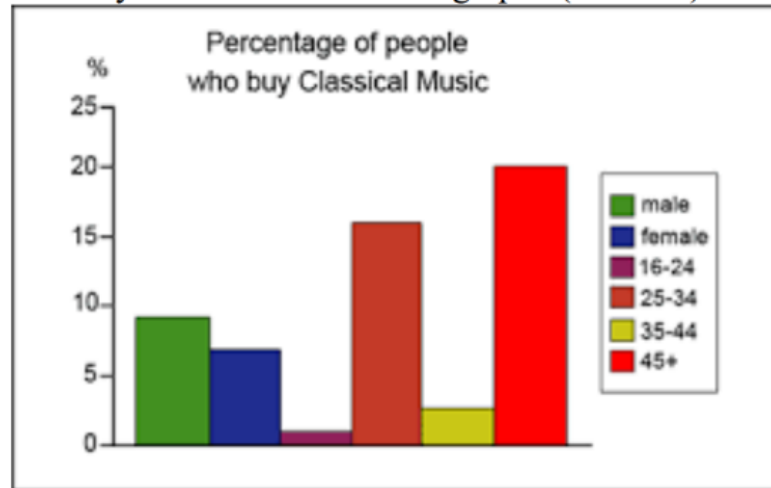
*first I will check his or her injury.

- I will take person in a safe place.
- Will give first aid treatment.
- When it's safe to do so, assess the casualty and, if necessary, dial 112 for an ambulance.

iii) How would you treat a scrapped knee?

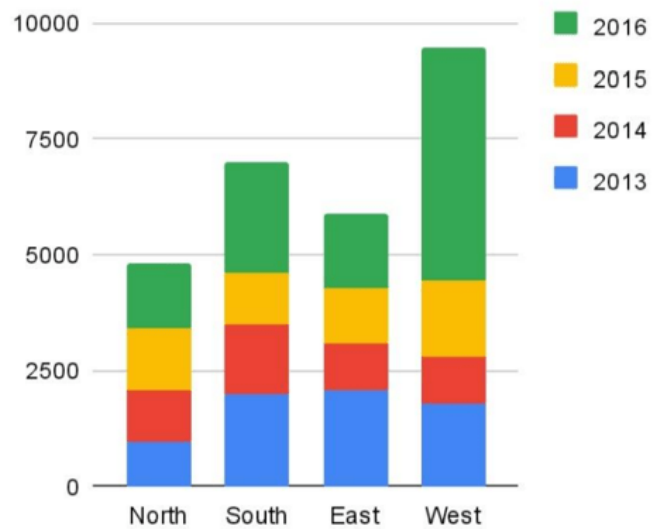
Ans: First of all I will clean the wound with Dettol. Then I will apply some antiseptic cream on it. Finally I will bandage the wound.

Q3. Identify the name of different graphs:(4 Marks)

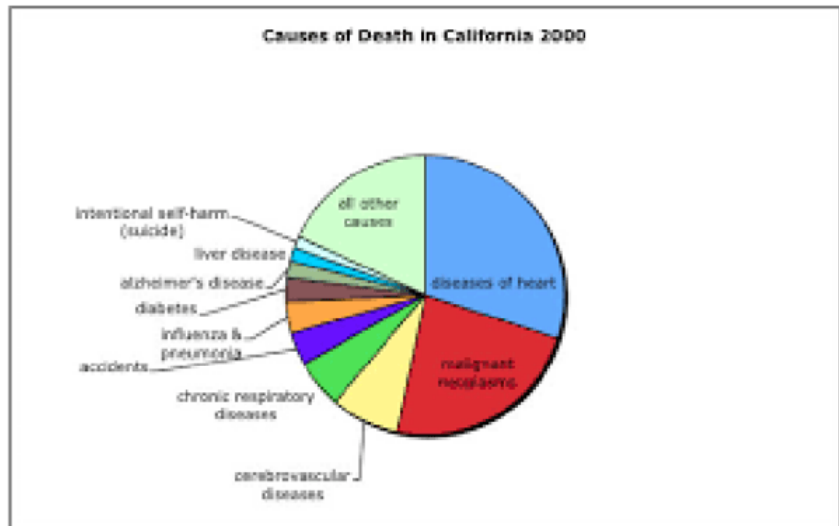


• **Ans:** It is called **Histogram**.

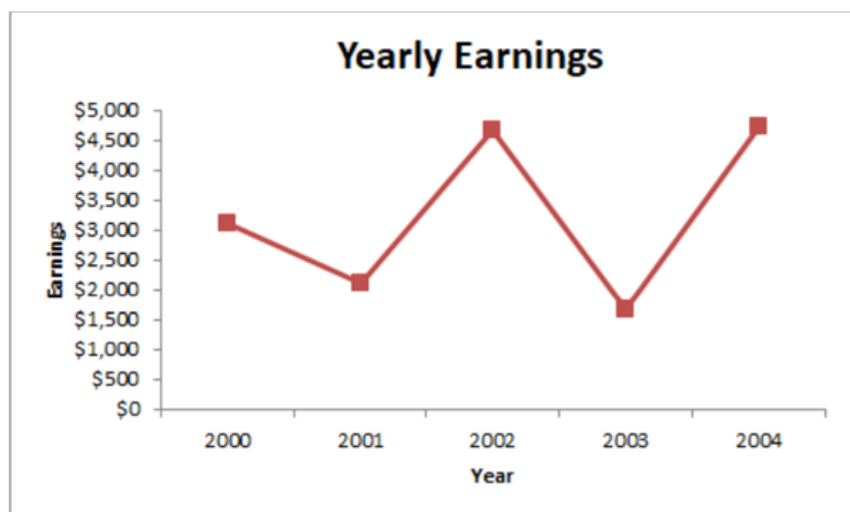
ABC SALES RECORD



• **Ans:** It is called **Bar graph**



Ans: It is called **Pie-Chart**.



Ans: It is called **Line Graph**.

Q4. Write any 4 important parts of a computer. (1 Mark)

Ans:

The names of the four most important parts are - **CPU, Monitor, Keyboard, and Mouse.**

Please follow and like us:



 Share

 Tweet

 Save